


Wie spät ist es ? (1)

The image contains 10 analog clocks arranged in a grid-like pattern. Each clock has a black hour hand and a red minute hand. The numbers 12, 3, 6, and 9 are marked on the clock face. A small colored circle is placed next to each clock:

- Top-left: Yellow circle, clock shows 2:30.
- Top-right: Orange circle, clock shows 10:30.
- Middle-left: Green circle, clock shows 3:00.
- Middle-center: Red circle, clock shows 5:30.
- Middle-right: Blue circle, clock shows 6:00.
- Bottom-left: Red circle, clock shows 4:30.
- Bottom-center: Green circle, clock shows 9:00.
- Bottom-right: Yellow circle, clock shows 7:30.
- Bottom-most-left: Blue circle, clock shows 2:30.
- Bottom-most-right: Orange circle, clock shows 10:30.

- 4 Uhr
- 11 Uhr
- 6 Uhr
- 8 Uhr
- 1 Uhr
- 3 Uhr
- 9 Uhr
- 7 Uhr
- 2 Uhr
- 5 Uhr



Wie spät ist es ? (2)

The image contains 10 analog clocks, each with a colored circle next to it. The circles are colored as follows: blue, green, yellow, orange, red, yellow, green, red, blue, orange.

The times shown on the clocks are: 9:00, 7:30, 1:00, 10:30, 4:00, 12:00, 1:30, 10:00, 11:00, and 6:00.

14 Uhr

24 Uhr

16 Uhr

18 Uhr

21 Uhr






13 Uhr

20 Uhr

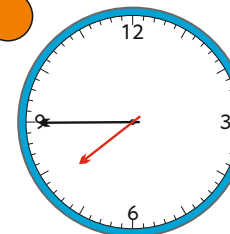
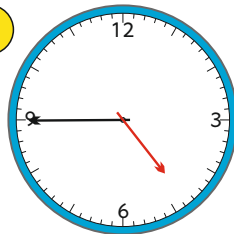
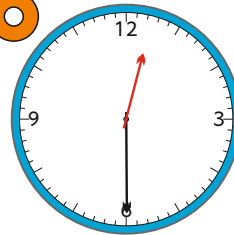

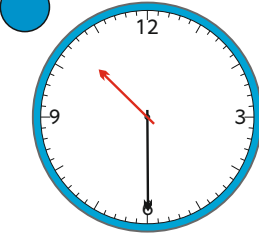
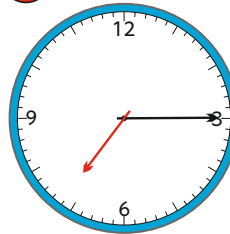
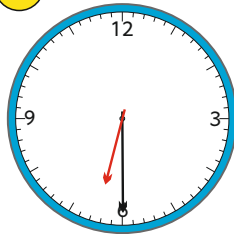
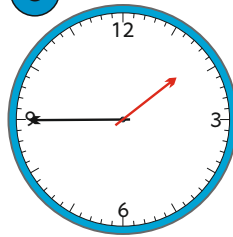
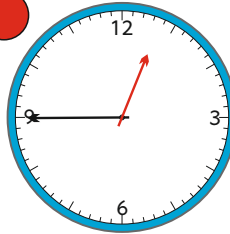
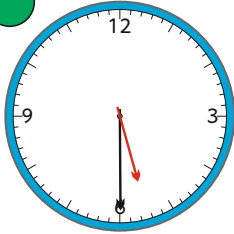
17 Uhr

23 Uhr

22 Uhr



Wie spät ist es ? (3)



01.45 Uhr

07.45 Uhr

12.30 Uhr

07.15 Uhr

05.30 Uhr



04.45 Uhr

10.30 Uhr

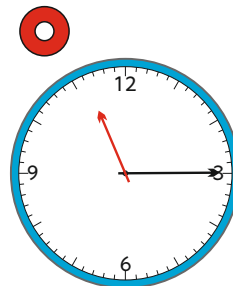
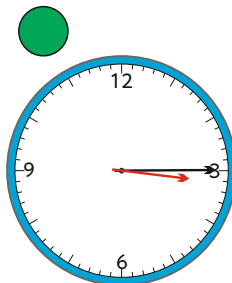
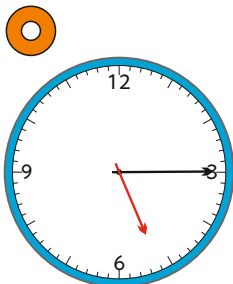
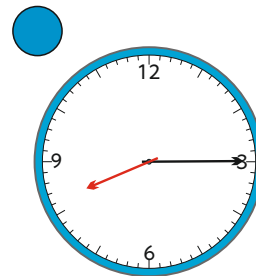
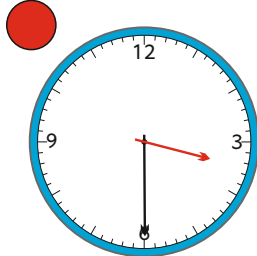
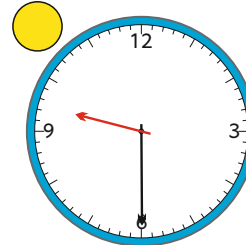
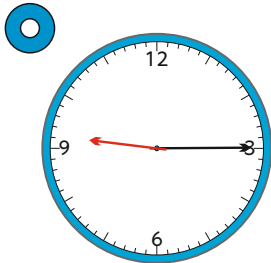
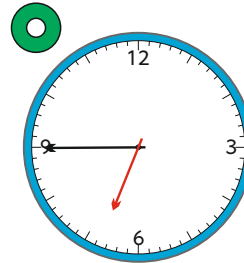
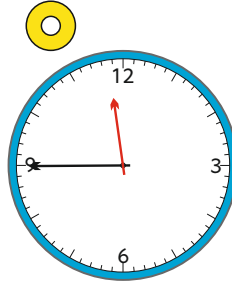
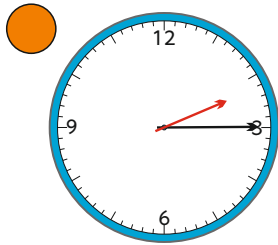
12.45 Uhr

06.30 Uhr

01.15 Uhr



Wie spät ist es ? (4)



03.30 Uhr

11.45 Uhr

05.15 Uhr

02.15 Uhr

09.15 Uhr






08.15 Uhr

06.45 Uhr

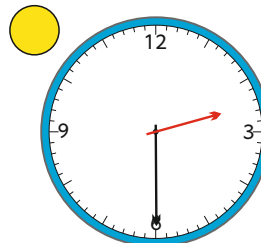
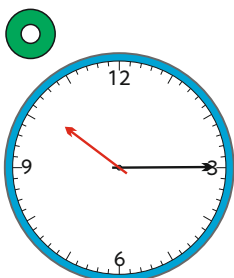
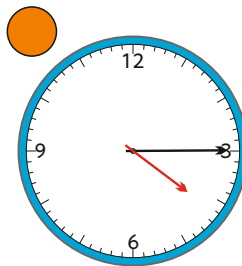
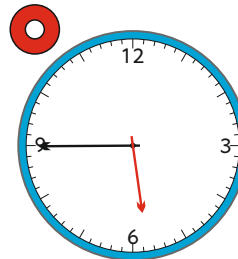
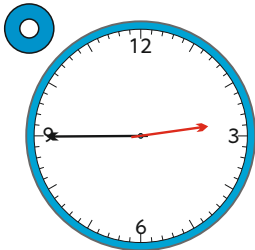
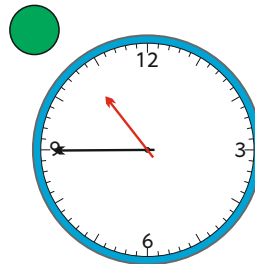
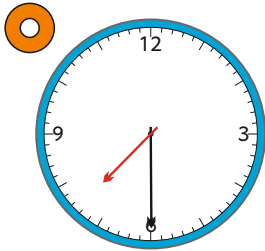
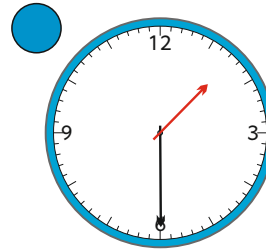
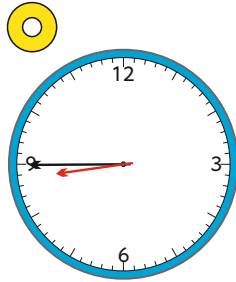
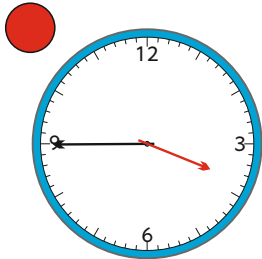
09.30 Uhr

11.15 Uhr

03.15 Uhr



Wie spät ist es ? (5)



01.30 Uhr

10.15 Uhr

02.30 Uhr

02.45 Uhr

03.45 Uhr

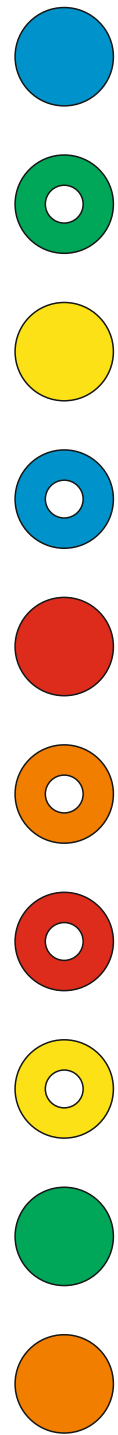
07.30 Uhr

05.45 Uhr

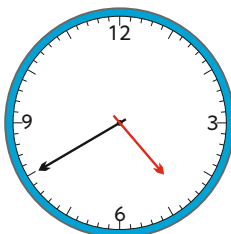
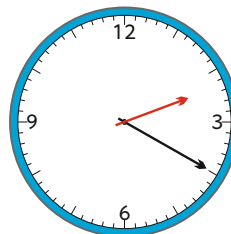
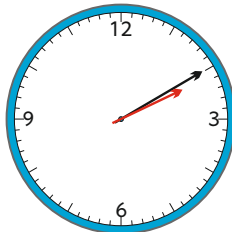
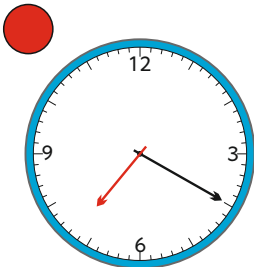
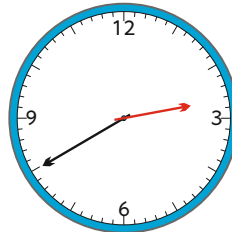
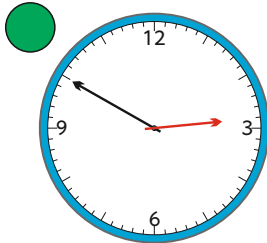
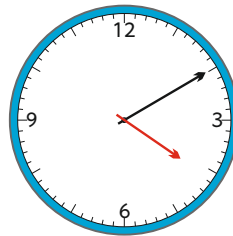
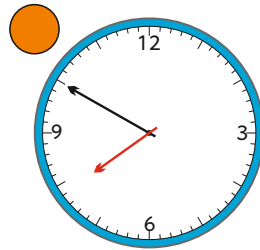
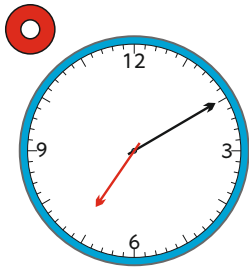
08.45 Uhr

10.45 Uhr

04.15 Uhr



Wie spät ist es ? (6)



02.50 Uhr

07.40 Uhr

02.20 Uhr

04.10 Uhr

07.10 Uhr


07.20 Uhr

02.40 Uhr

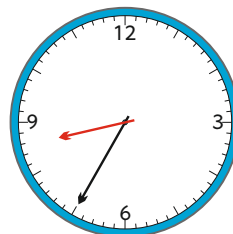
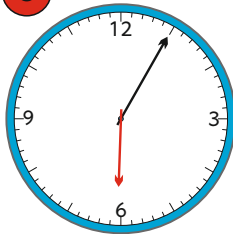
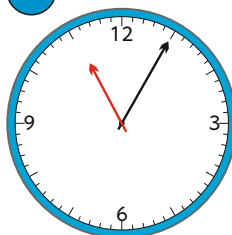
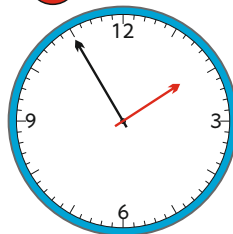
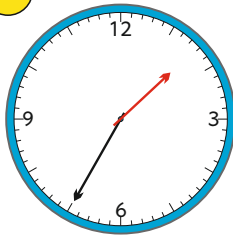
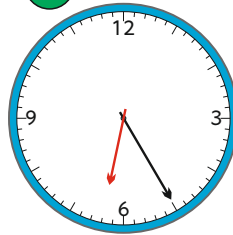
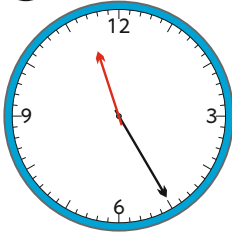
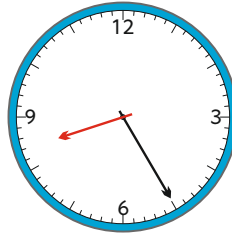
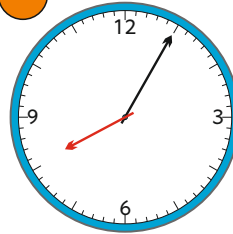
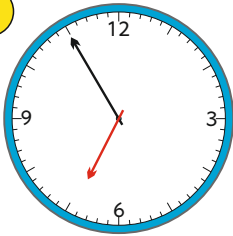
07.50 Uhr

04.40 Uhr

02.10 Uhr



Wie spät ist es ? (7)



06.25 Uhr

06.05 Uhr

08.35 Uhr

08.05 Uhr

01.35 Uhr

06.55 Uhr

11.25 Uhr

01.55 Uhr

11.05 Uhr

08.25 Uhr

