



Bilder: ErmakovaMarina



Bilder: ErmakovaMarina

Wie viele Plättchen sind es ?

● ● ● ● ● ● ● ●

● ● ● ● ● ● ● ● ● ● ● ●
● ●

● ● ● ● ● ● ● ● ● ● ● ●
● ● ● ● ●

● ● ● ● ● ● ● ● ● ● ● ●
● ● ● ● ● ● ● ● ● ● ● ●

● ● ● ● ● ● ● ● ● ● ● ●
● ● ● ● ● ● ● ● ● ●

● ● ● ● ● ● ● ●

● ● ● ● ● ● ● ● ● ● ● ●
● ● ● ● ●

● ● ● ● ● ● ● ● ● ● ● ●
● ● ● ● ● ● ● ● ● ● ● ●

● ● ● ● ● ● ● ● ● ● ● ●
● ● ● ● ● ● ● ● ● ●

● ● ● ● ● ● ● ● ● ● ● ●

● ● ● ● ● ● ● ● ● ● ● ●
● ● ● ● ● ● ● ● ● ●

● ● ● ● ● ● ● ●

● ● ● ● ● ● ● ● ● ● ● ●

● ● ● ● ● ● ● ● ● ● ● ●
● ● ● ● ● ● ● ● ● ● ● ●

● ● ● ● ● ● ● ● ● ● ● ●

● ● ● ● ● ● ● ● ● ● ● ●
● ● ● ● ● ● ● ● ● ● ● ●







Bilder: ErmakovaMarina



Bilder: ErmakovaMarina

Wie viele Streichhölzer sind es ?






Bilder: ErmakovaMarina



Bilder: ErmakovaMarina

Auf welche Zahl zeigt der Pfeil ?



www.mathemonsterchen.de

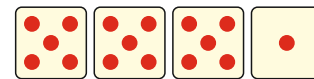

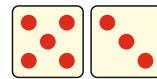
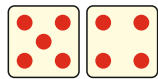

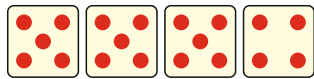
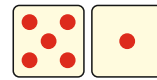
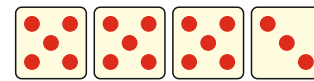








Bilder: ErmakovaMarina



Bilder: ErmakovaMarina

Wie viele Punkte sind es ?





Bilder: ErmakovaMarina



Bilder: ErmakovaMarina

Wie viele Euro sind es ?



www.mathemonsterchen.de

5



Bilder: ErmakovaMarina



Bilder: ErmakovaMarina

Welche Zahl fehlt ?

16 18

 7 8

 14 15

9 10

7 8

14 16

17 19

3 4

 8 9

18 20

14 15

 13 14

 5 6

13 15

 11 12

7 9