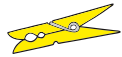


1

Welches Zeichen ist richtig?



<



>



=

$$\leftarrow 140 + 80 \bigcirc 310$$

$$\leftarrow 650 + 60 \bigcirc 690$$

$$\leftarrow 840 + 90 \bigcirc 930$$

$$\leftarrow 320 + 50 \bigcirc 400$$

$$\leftarrow 440 + 60 \bigcirc 480$$

$$\leftarrow 510 + 70 \bigcirc 580$$

$$\leftarrow 270 + 60 \bigcirc 310$$

$$\leftarrow 750 + 30 \bigcirc 790$$

$$\leftarrow 920 + 70 \bigcirc 990$$

$$\leftarrow 450 + 70 \bigcirc 510$$

$$350 \bigcirc 280 + 80 \rightarrow$$

$$730 \bigcirc 660 + 40 \rightarrow$$

$$280 \bigcirc 190 + 70 \rightarrow$$

$$120 \bigcirc 80 + 50 \rightarrow$$

$$420 \bigcirc 360 + 60 \rightarrow$$

$$900 \bigcirc 820 + 70 \rightarrow$$

$$590 \bigcirc 530 + 60 \rightarrow$$

$$940 \bigcirc 870 + 90 \rightarrow$$

$$630 \bigcirc 580 + 50 \rightarrow$$

$$170 \bigcirc 110 + 90 \rightarrow$$



Welches Zeichen ist richtig?



$430 - 90 \bigcirc 350$

$270 \bigcirc 320 - 50$

$720 - 80 \bigcirc 600$

$560 \bigcirc 620 - 80$

$630 - 40 \bigcirc 560$

$840 \bigcirc 910 - 90$

$860 - 70 \bigcirc 810$

$700 \bigcirc 820 - 80$

$500 - 50 \bigcirc 420$

$310 \bigcirc 420 - 90$

$570 - 80 \bigcirc 490$

$480 \bigcirc 520 - 40$

$620 - 70 \bigcirc 570$

$320 \bigcirc 380 - 40$

$240 - 80 \bigcirc 130$

$940 \bigcirc 980 - 40$

$330 - 50 \bigcirc 290$

$660 \bigcirc 700 - 30$

$770 - 10 \bigcirc 740$

$430 \bigcirc 490 - 60$



3

Welches Zeichen ist richtig?



$470 + 330 \bigcirc 840$

$210 + 240 \bigcirc 450$

$160 + 150 \bigcirc 330$

$790 + 200 \bigcirc 970$

$360 + 360 \bigcirc 720$

$340 + 190 \bigcirc 580$

$180 + 210 \bigcirc 270$

$370 + 180 \bigcirc 640$

$260 + 350 \bigcirc 610$

$270 + 120 \bigcirc 410$

$150 + 170 \bigcirc 380$

$440 + 190 \bigcirc 620$

$240 + 390 \bigcirc 560$

$650 + 230 \bigcirc 830$

$760 + 240 \bigcirc 990$

$360 + 130 \bigcirc 490$

$530 + 240 \bigcirc 780$

$250 + 320 \bigcirc 570$

$880 + 110 \bigcirc 950$

$140 + 80 \bigcirc 220$



Welches Zeichen ist richtig?



$830 - 150 \bigcirc 480$

$840 - 130 \bigcirc 710$

$760 - 210 \bigcirc 550$

$720 - 160 \bigcirc 430$

$950 - 280 \bigcirc 830$

$480 - 270 \bigcirc 260$

$460 - 250 \bigcirc 220$

$360 - 190 \bigcirc 170$

$540 - 350 \bigcirc 190$

$970 - 130 \bigcirc 810$

$990 - 280 \bigcirc 760$

$560 - 290 \bigcirc 290$

$630 - 210 \bigcirc 370$

$880 - 270 \bigcirc 640$

$850 - 150 \bigcirc 650$

$750 - 440 \bigcirc 310$

$740 - 230 \bigcirc 510$

$600 - 20 \bigcirc 570$

$530 - 140 \bigcirc 360$

$570 - 460 \bigcirc 140$

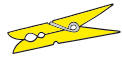


5

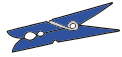
Welches Zeichen ist richtig?



<



>



=

$$\leftarrow 380 + 420 \bigcirc 400 + 150 \rightarrow$$

$$\leftarrow 160 + 560 \bigcirc 610 + 110 \rightarrow$$

$$\leftarrow 720 + 130 \bigcirc 660 + 210 \rightarrow$$

$$\leftarrow 940 + 50 \bigcirc 540 + 320 \rightarrow$$

$$\leftarrow 630 + 170 \bigcirc 350 + 450 \rightarrow$$

$$\leftarrow 460 + 350 \bigcirc 470 + 360 \rightarrow$$

$$\leftarrow 840 + 160 \bigcirc 380 + 620 \rightarrow$$

$$\leftarrow 330 + 550 \bigcirc 660 + 190 \rightarrow$$

$$\leftarrow 270 + 490 \bigcirc 500 + 180 \rightarrow$$

$$\leftarrow 520 + 380 \bigcirc 630 + 260 \rightarrow$$

$$760 + 150 \bigcirc 630 + 240 \rightarrow$$

$$680 + 220 \bigcirc 520 + 380 \rightarrow$$

$$190 + 430 \bigcirc 370 + 310 \rightarrow$$

$$550 + 260 \bigcirc 430 + 380 \rightarrow$$

$$340 + 450 \bigcirc 460 + 330 \rightarrow$$

$$520 + 130 \bigcirc 380 + 290 \rightarrow$$

$$720 + 160 \bigcirc 450 + 510 \rightarrow$$

$$660 + 280 \bigcirc 620 + 230 \rightarrow$$

$$440 + 150 \bigcirc 170 + 330 \rightarrow$$

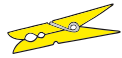
$$620 + 320 \bigcirc 880 + 40 \rightarrow$$



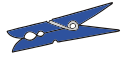
Welches Zeichen ist richtig?



<



>



=

$$\leftarrow 630 - 240 \bigcirc 900 - 450$$

$$940 - 670 \bigcirc 480 - 350 \rightarrow$$

$$\leftarrow 410 - 350 \bigcirc 720 - 660$$

$$840 - 500 \bigcirc 650 - 310 \rightarrow$$

$$\leftarrow 720 - 430 \bigcirc 350 - 20$$

$$350 - 160 \bigcirc 230 - 110 \rightarrow$$

$$\leftarrow 360 - 280 \bigcirc 540 - 490$$

$$800 - 430 \bigcirc 540 - 170 \rightarrow$$

$$\leftarrow 740 - 570 \bigcirc 720 - 550$$

$$750 - 390 \bigcirc 830 - 470 \rightarrow$$

$$\leftarrow 520 - 260 \bigcirc 650 - 380$$

$$560 - 470 \bigcirc 960 - 840 \rightarrow$$

$$\leftarrow 840 - 390 \bigcirc 900 - 450$$

$$680 - 520 \bigcirc 720 - 570 \rightarrow$$

$$\leftarrow 860 - 540 \bigcirc 870 - 560$$

$$730 - 650 \bigcirc 540 - 490 \rightarrow$$

$$\leftarrow 550 - 220 \bigcirc 450 - 190$$

$$570 - 230 \bigcirc 660 - 300 \rightarrow$$

$$\leftarrow 970 - 770 \bigcirc 440 - 300$$

$$490 - 180 \bigcirc 390 - 170 \rightarrow$$

